


何分たったでしょう？①

月 日

名前

左の時こくから 右の時こくまでの
時間は 何分ですか？



①



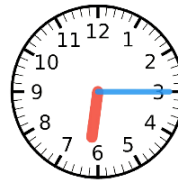
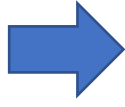
()

②



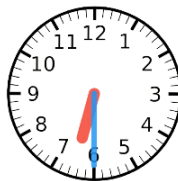
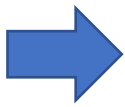
()

③



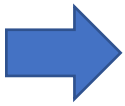
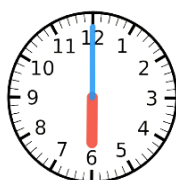
()

④



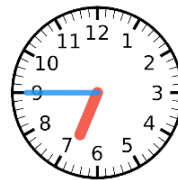
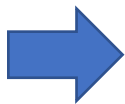
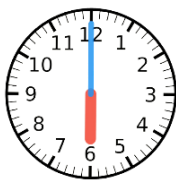
()

⑤



()

⑥



()