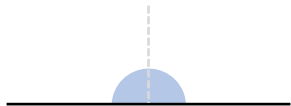
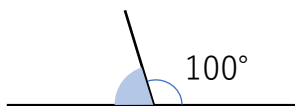


# 平面図形 「角度」 ②

☆ 次の色のついた角度を答えましょう。



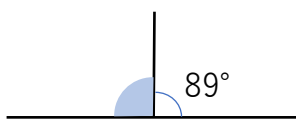
① [            ]



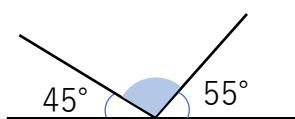
② [            ]



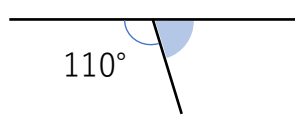
③ [            ]



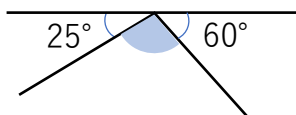
④ [            ]



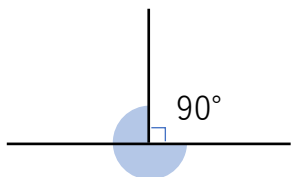
⑤ [            ]



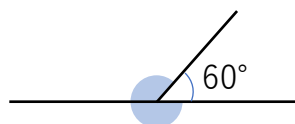
⑥ [            ]



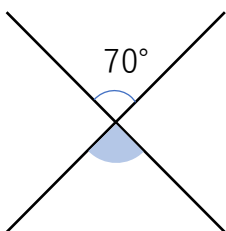
⑦ [            ]



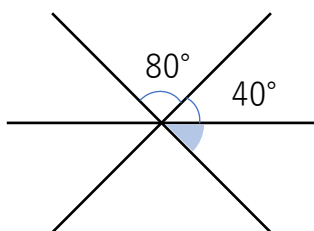
⑧ [            ]



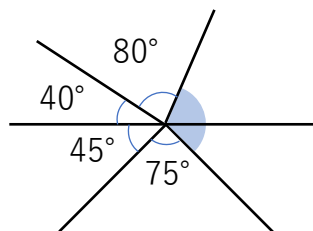
⑨ [            ]



⑩ [            ]



⑪ [            ]



⑫ [            ]