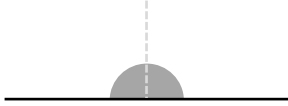
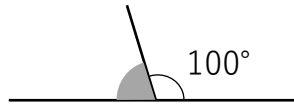


平面図形「角度」②


☆ 次の色のついた角度を答えましょう。



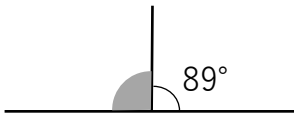
① []



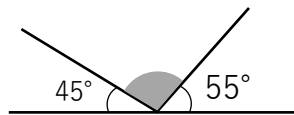
② []



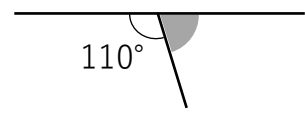
③ []



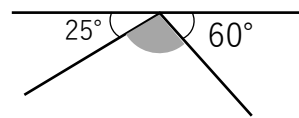
④ []



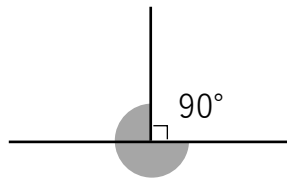
⑤ []



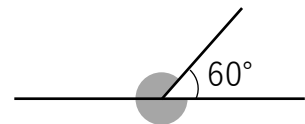
⑥ []



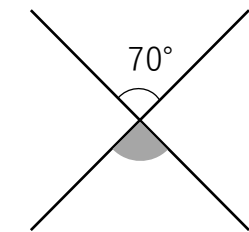
⑦ []



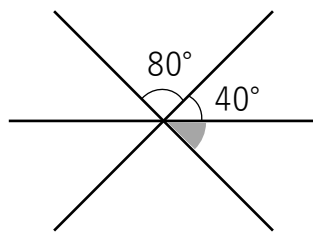
⑧ []



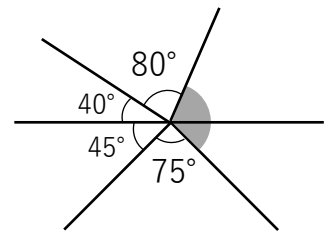
⑨ []



⑩ []



⑪ []



⑫ []