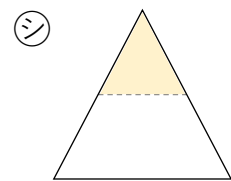
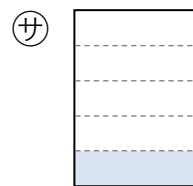
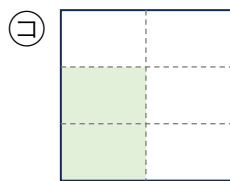
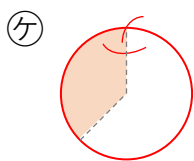
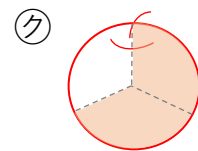
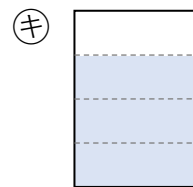
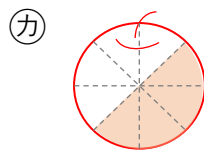
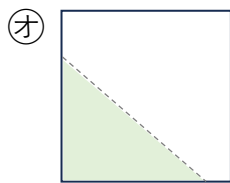
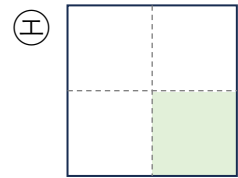
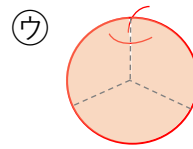
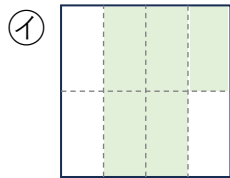
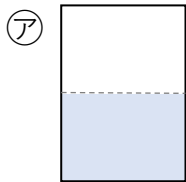


# ぶんすう ①

① 下の分数にあてはまるものを㉠～㉡からえらびましょう。



$\frac{1}{2}$  (      )       $\frac{1}{4}$  (      )       $\frac{1}{5}$  (      )       $\frac{2}{6}$  (      )

$\frac{2}{3}$  (      )       $\frac{3}{3}$  (      )       $\frac{3}{4}$  (      )       $\frac{4}{8}$  (      )

$\frac{5}{8}$  (      )      分数ではない (      )