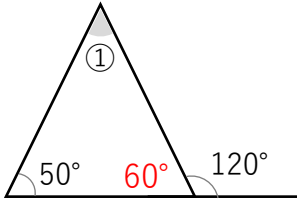


外角 答え

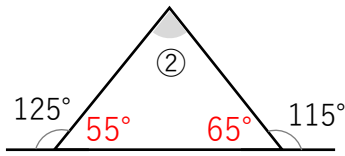
① 次の角度を求めましょう。



式

$$180 - (50 + 60) = 70$$

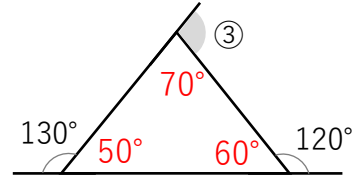
答え 70°



式

$$180 - (55 + 65) = 60$$

答え 60°

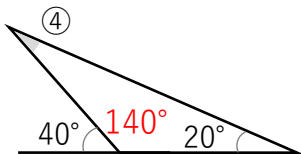


式

$$180 - (50 + 60) = 70$$

$$180 - 70 = 110$$

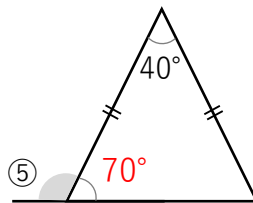
答え 110°



式

$$180 - (140 + 20) = 20$$

答え 20°



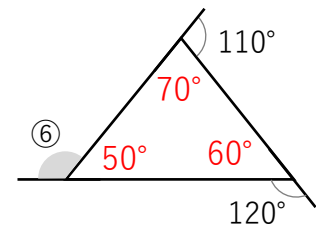
式

$$180 - 40 = 140$$

$$140 \div 2 = 70$$

$$180 - 70 = 110$$

答え 110°

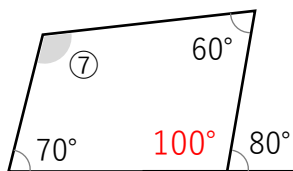


式

$$180 - (70 + 60) = 50$$

$$180 - 50 = 130$$

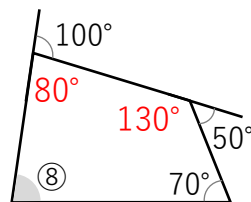
答え 130°



式

$$360 - (100 + 70 + 60) = 130$$

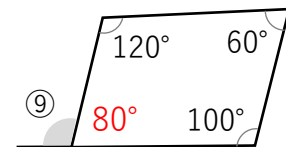
答え 130°



式

$$360 - (70 + 130 + 80) = 80$$

答え 80°



式

$$360 - (100 + 60 + 120) = 80$$

$$180 - 80 = 100$$

答え 100°