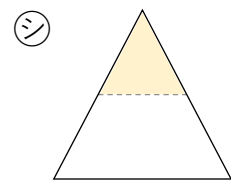
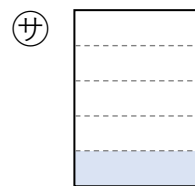
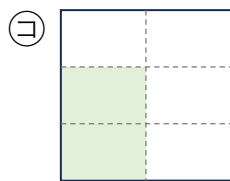
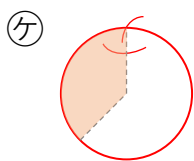
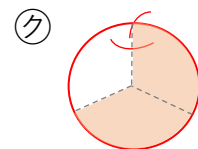
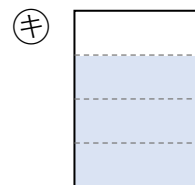
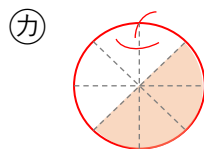
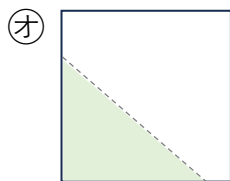
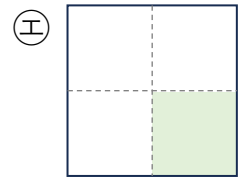
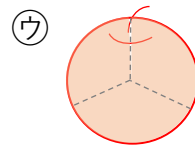
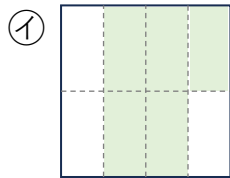
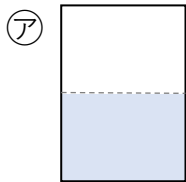


ぶんすう ① 答え

① 下の分数にあてはまるものを㉠～㉤からえらびましょう。



$\frac{1}{2}$ (㉠) $\frac{1}{4}$ (㉣) $\frac{1}{5}$ (㉪) $\frac{2}{6}$ (㉥)

$\frac{2}{3}$ (㉧) $\frac{3}{3}$ (㉢) $\frac{3}{4}$ (㉦) $\frac{4}{8}$ (㉡)

$\frac{5}{8}$ (㉡) 分数ではない (㉤ ㉨ ㉫)