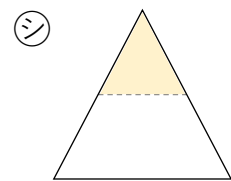
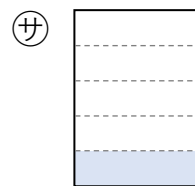
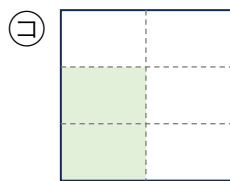
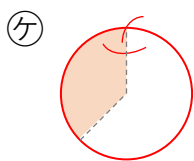
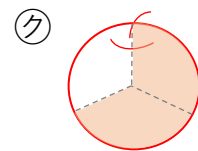
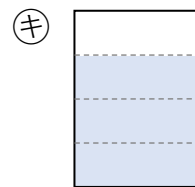
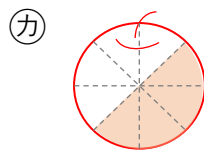
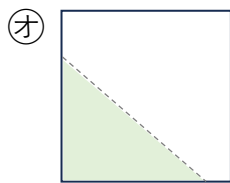
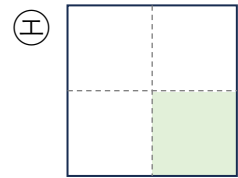
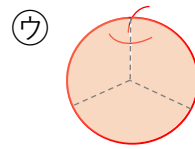
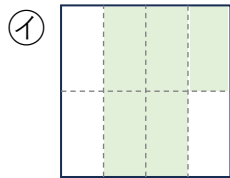
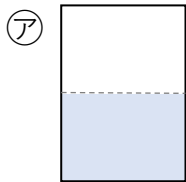


ぶんすう ①

① 下の分数にあてはまるものを㉠～㉡からえらびましょう。



$\frac{1}{2}$ () $\frac{1}{4}$ () $\frac{1}{5}$ () $\frac{2}{6}$ ()

$\frac{2}{3}$ () $\frac{3}{3}$ () $\frac{3}{4}$ () $\frac{4}{8}$ ()

$\frac{5}{8}$ () 分数ではない ()