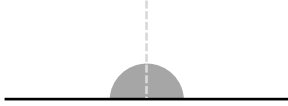
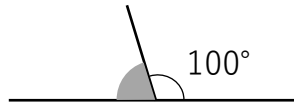


## 平面図形「角度」② 答え


① 次の色のついた角度を答えましょう。



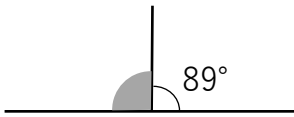
① { 180° }



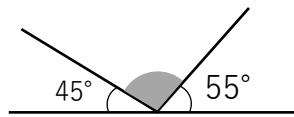
② { 80° }



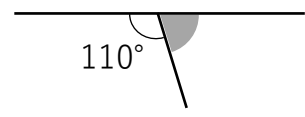
③ { 30° }



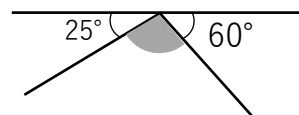
④ { 91° }



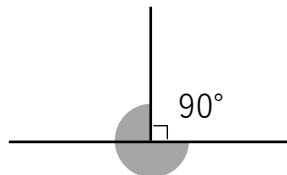
⑤ { 80° }



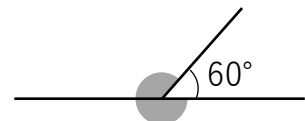
⑥ { 70° }



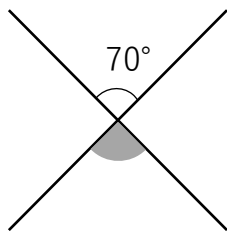
⑦ { 95° }



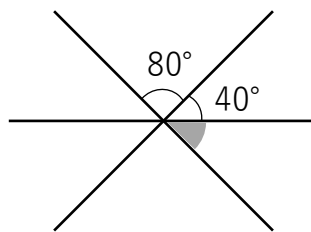
⑧ { 270° }



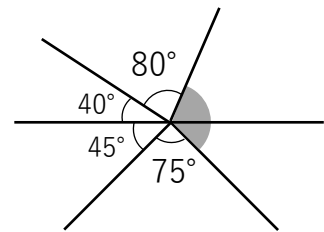
⑨ { 300° }



⑩ { 70° }



⑪ { 60° }



⑫ { 120° }