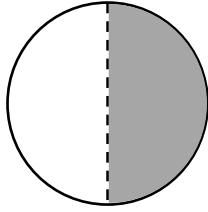
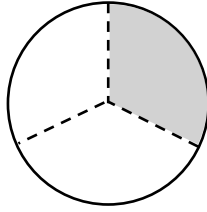


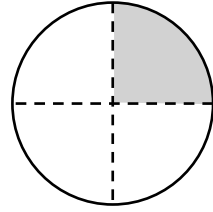
① 色がついている分数をこたえましょう。



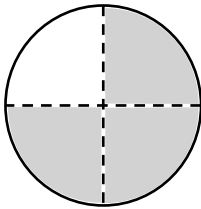
① {  $\frac{1}{2}$  }



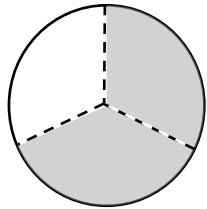
② {                    }



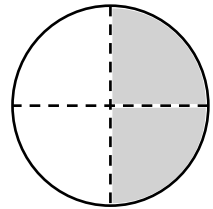
③ {                    }




④ {                    }



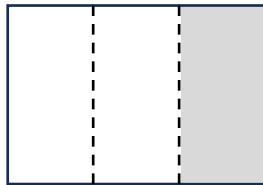
⑤ {                    }



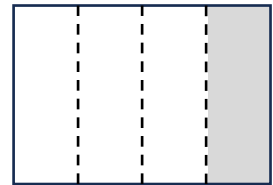
⑥ {                    }




⑦ {                    }




⑧ {                    }




⑨ {                    }



⑩ {                    }

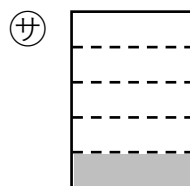
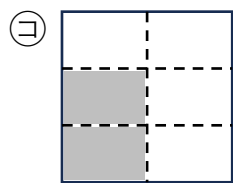
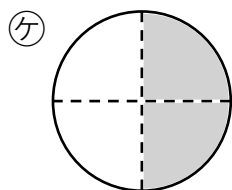
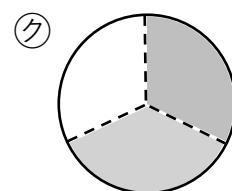
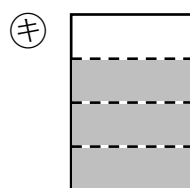
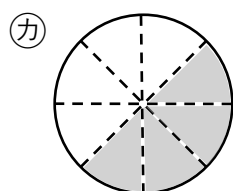
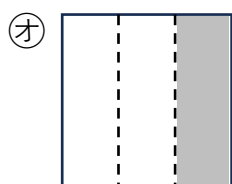
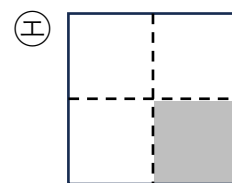
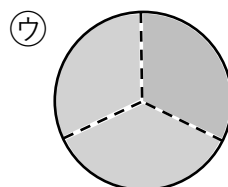
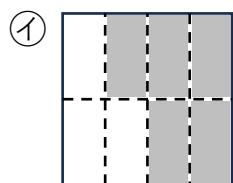
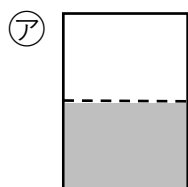


⑪ {                    }



⑫ {                    }

① 下の分数にあてはまるものを㉠～㉨から選びましょう。



$\frac{1}{2}$  ( )     $\frac{1}{4}$  ( )     $\frac{1}{5}$  ( )     $\frac{2}{6}$  ( )

$\frac{2}{3}$  ( )     $\frac{3}{3}$  ( )     $\frac{3}{4}$  ( )     $\frac{4}{8}$  ( )

$\frac{5}{8}$  ( )     $\frac{2}{4}$  ( )     $\frac{1}{3}$  ( )