


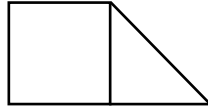
どこに入る？

No. 2


① 次の図形に  の三角形がどこに入るか答えましょう。



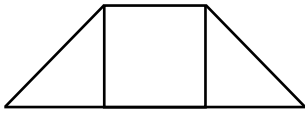
① (2 こ)




② ()



③ ()



④ ()



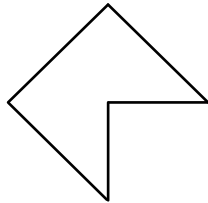
⑤ ()



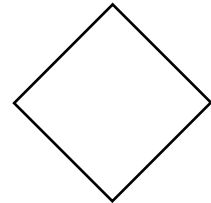
⑥ ()



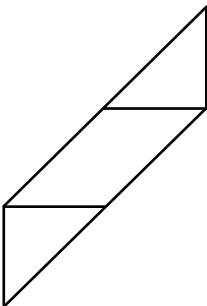
⑦ ()



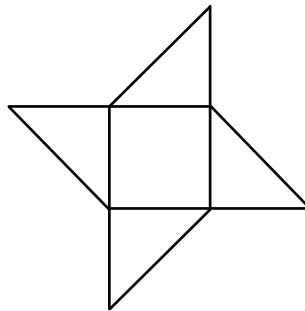
⑧ ()



⑨ ()



⑩ ()



⑪ ()