


どこに入る？ 答え

No. 2

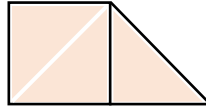
数楽の家

<https://suugakunoie-fukuoka.com/>

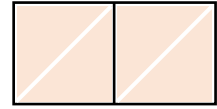
① 次の図形に  の三角形がどこに入るか答えましょう。



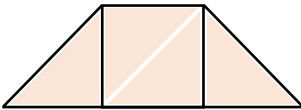
① (2 こ)



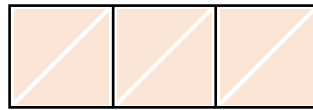
② (3 こ)



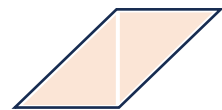
③ (4 こ)



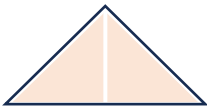
④ (4 こ)



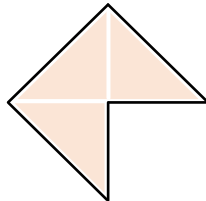
⑤ (6 こ)



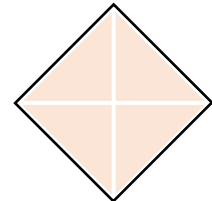
⑥ (2 こ)



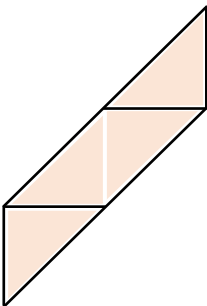
⑦ (2 こ)



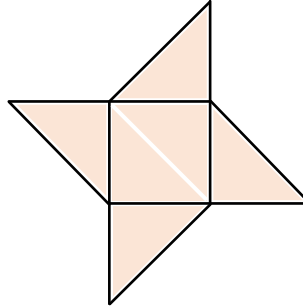
⑧ (3 こ)



⑨ (4 こ)



⑩ (4 こ)



⑪ (6 こ)