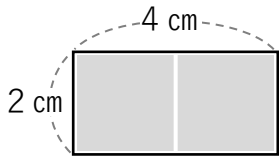
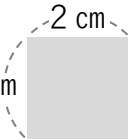


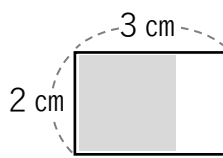
どこに入る？ 答え

No. 4

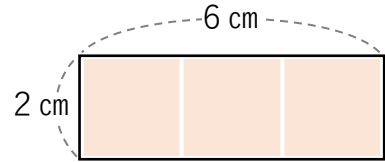
① 次の図形に 2 cm の正方形がどこに入るか答えましょう。



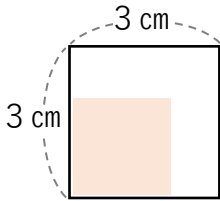
① (2 こ)



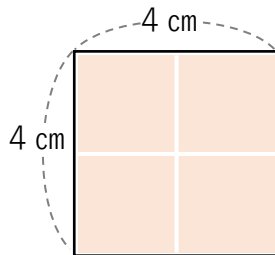
② (1 こ)



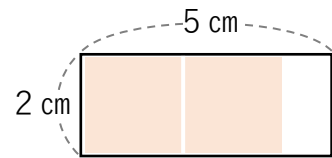
③ (3 こ)



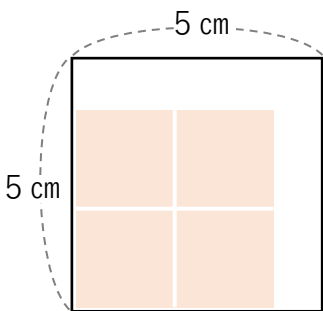
④ (1 こ)



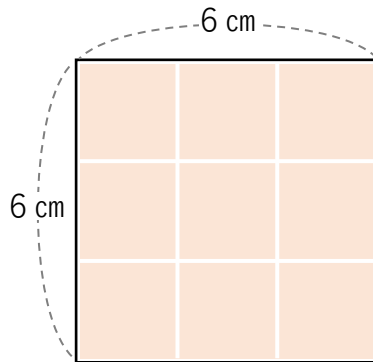
⑤ (4 こ)



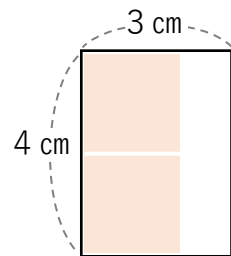
⑥ (2 こ)



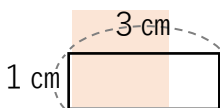
⑦ (4 こ)



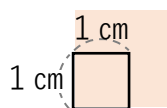
⑧ (9 こ)



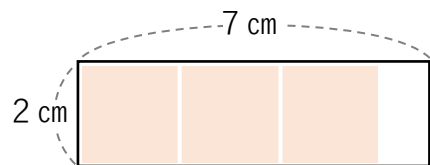
⑨ (2 こ)



⑩ (0 こ)



⑪ (0 こ)



⑫ (3 こ)