



# どこに入る？ 答え

No. 3

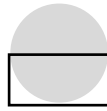
数楽の家

<https://suugakunoie-fukuoka.com/>

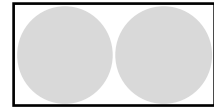
① 次の図形に  の球がどこに入るか 答えましょう。




① ( 1 こ )



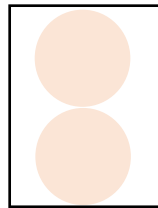
② ( はいらない )



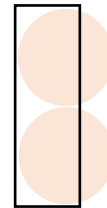
③ ( 2 こ )



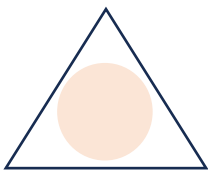
④ ( 4 こ )



⑤ ( 2 こ )



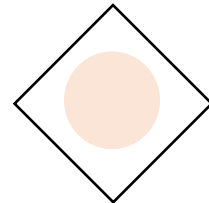
⑥ ( はいらない )




⑦ ( 1 こ )




⑧ ( はいらない )



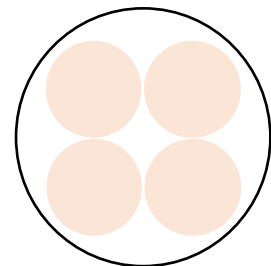
⑨ ( 1 こ )



⑩ ( 1 こ )



⑪ ( はいらない )



⑫ ( 4 こ )