



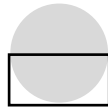
どこに入る？

No. 3

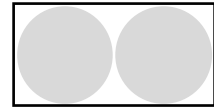
① 次の図形に  の球がどこに入るか 答えましょう。




① (1 こ)



② (はいらない)




③ ()



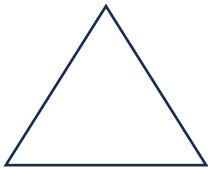
④ ()



⑤ ()



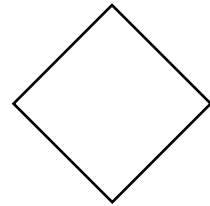
⑥ ()




⑦ ()



⑧ ()




⑨ ()



⑩ ()



⑪ ()



⑫ ()