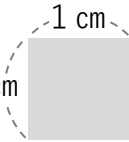


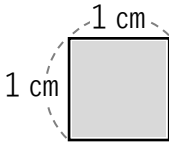
# どこに入る？ 答え

No.1

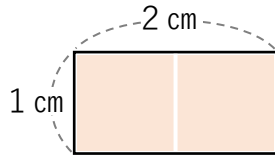
数楽の家

<https://suugakunoie-fukuoka.com/>

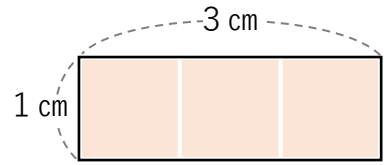
① 次の図形に 1 cm  の正方形がどこに入るか 答えましょう。



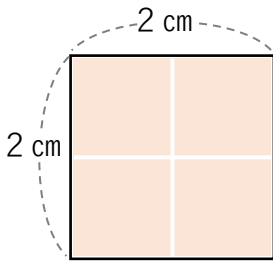
① ( 1 こ )



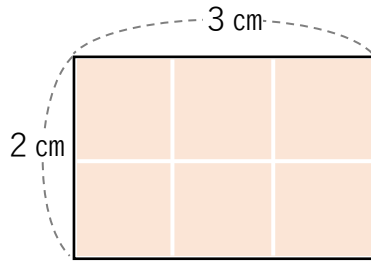
② ( 2 こ )



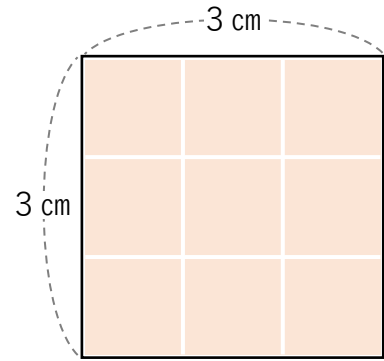
③ ( 3 こ )



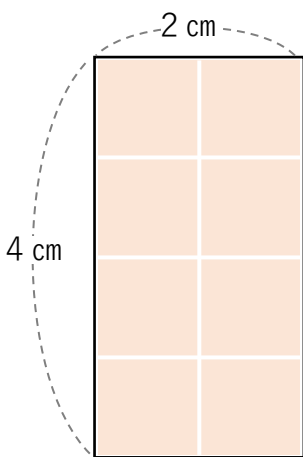
④ ( 4 こ )



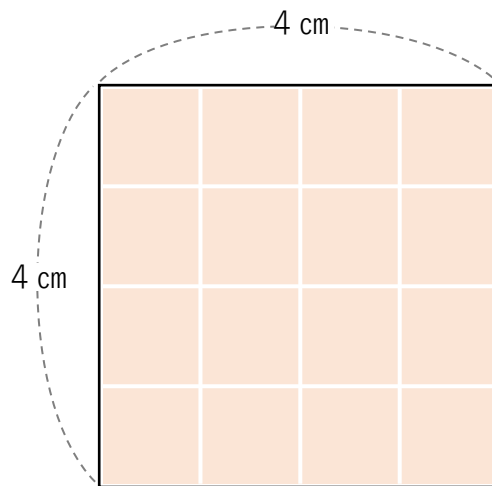
⑤ ( 6 こ )



⑥ ( 9 こ )



⑦ ( 8 こ )



⑧ ( 16 こ )